

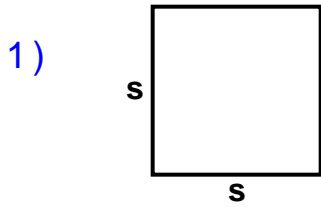
Name : _____

Score : _____

Teacher : _____

Date : _____

Identify and Calculate the Area and Perimeter for each Quadrilateral.

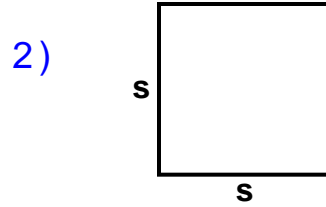


$s = 6.3 \text{ mm}$

Area: _____

Perimeter: _____

Type: _____

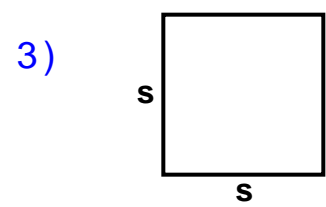


$s = 6.4 \text{ inches}$

Area: _____

Perimeter: _____

Type: _____

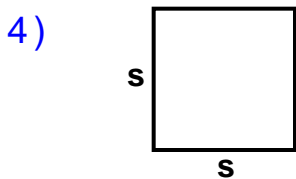


$s = 6 \text{ cm}$

Area: _____

Perimeter: _____

Type: _____

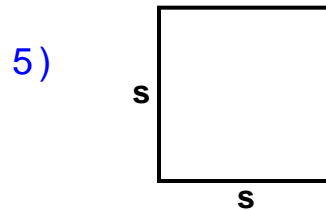


$s = 5.3 \text{ mm}$

Area: _____

Perimeter: _____

Type: _____

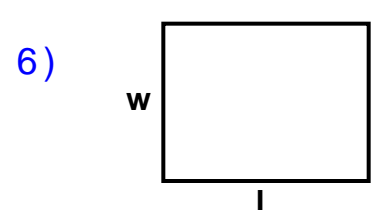


$s = 6.5 \text{ yds}$

Area: _____

Perimeter: _____

Type: _____

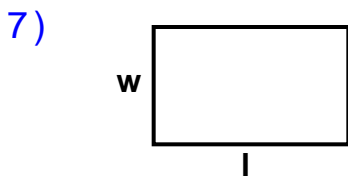


$l = 7.7 \text{ inches}$ $w = 5.9 \text{ inches}$

Area: _____

Perimeter: _____

Type: _____

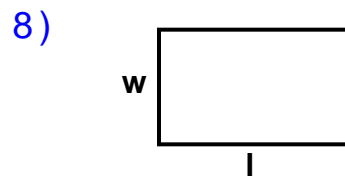


$l = 7.3 \text{ yds}$ $w = 4.4 \text{ yds}$

Area: _____

Perimeter: _____

Type: _____

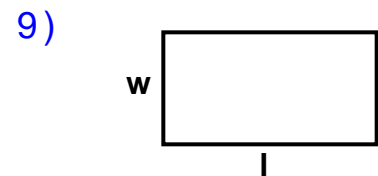


$l = 7.2 \text{ cm}$ $w = 4.3 \text{ cm}$

Area: _____

Perimeter: _____

Type: _____



$l = 8 \text{ ft}$ $w = 4.2 \text{ ft}$

Area: _____

Perimeter: _____

Type: _____



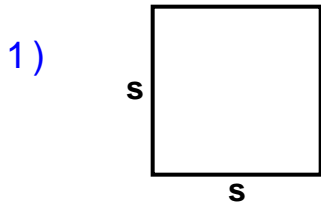
Name : _____

Score : _____

Teacher : _____

Date : _____

Identify and Calculate the Area and Perimeter for each Quadrilateral.

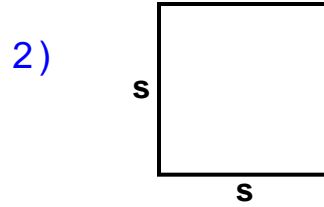


$s = 6.3 \text{ mm}$

Area: 39.69 sq mm

Perimeter: 25.2 mm

Type: Square

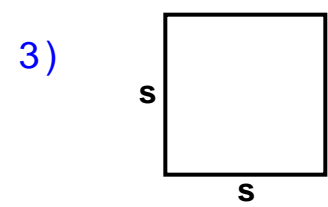


$s = 6.4 \text{ inches}$

Area: 40.96 sq inches

Perimeter: 25.6 inches

Type: Square

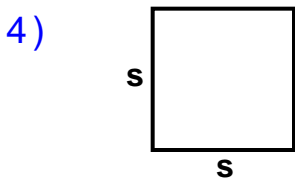


$s = 6 \text{ cm}$

Area: 36 sq cm

Perimeter: 24 cm

Type: Square

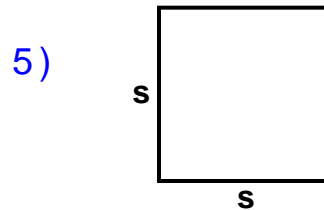


$s = 5.3 \text{ mm}$

Area: 28.09 sq mm

Perimeter: 21.2 mm

Type: Square

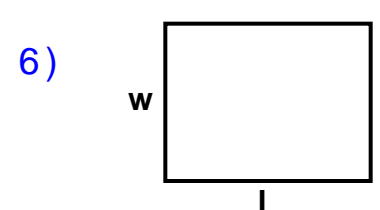


$s = 6.5 \text{ yds}$

Area: 42.25 sq yds

Perimeter: 26 yds

Type: Square

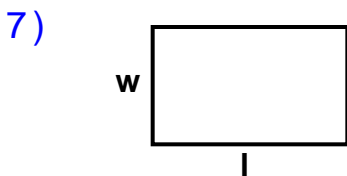


$l = 7.7 \text{ inches}$ $w = 5.9 \text{ inches}$

Area: 45.43 sq inches

Perimeter: 27.2 inches

Type: Rectangle

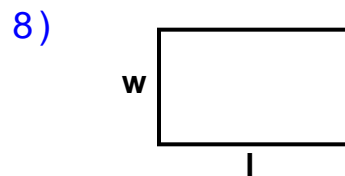


$l = 7.3 \text{ yds}$ $w = 4.4 \text{ yds}$

Area: 32.12 sq yds

Perimeter: 23.4 yds

Type: Rectangle

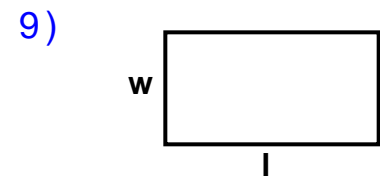


$l = 7.2 \text{ cm}$ $w = 4.3 \text{ cm}$

Area: 30.96 sq cm

Perimeter: 23 cm

Type: Rectangle



$l = 8 \text{ ft}$ $w = 4.2 \text{ ft}$

Area: 33.6 sq ft

Perimeter: 24.4 ft

Type: Rectangle

