

Mon., May 7, 2018

Points of View

- which way we are looking at a 3-D object

front view

side view

back view

top view

bottom view

ex.


front view



top view




side view



bottom
view



back view



rectangular prism

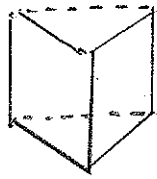


ex. front view



side view

back view



top view



bottom view



Triangular prism

Assignment:

Do 3
paper.

drawings of objects' point of view on